




Use the numberline to solve each problem. The first is marked for you.

**Answers**



1. \_\_\_\_\_

2. \_\_\_\_\_



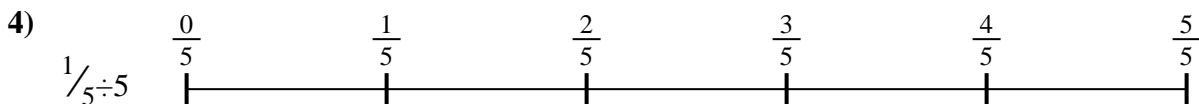
3. \_\_\_\_\_

4. \_\_\_\_\_



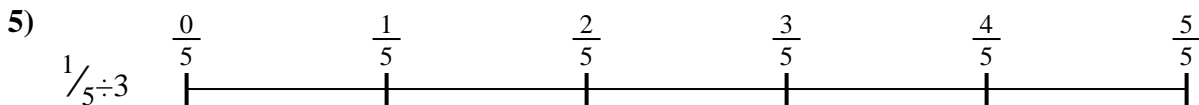
5. \_\_\_\_\_

6. \_\_\_\_\_

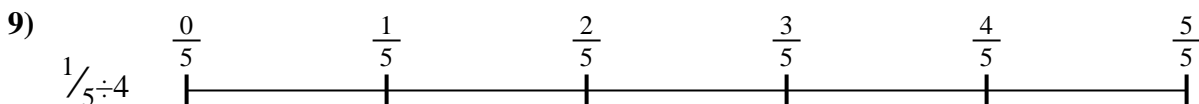
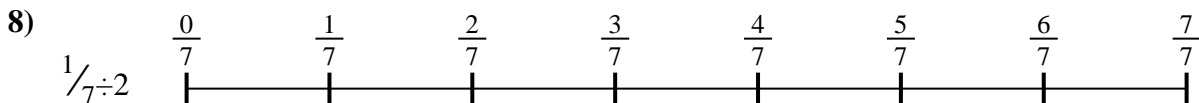



7. \_\_\_\_\_

8. \_\_\_\_\_



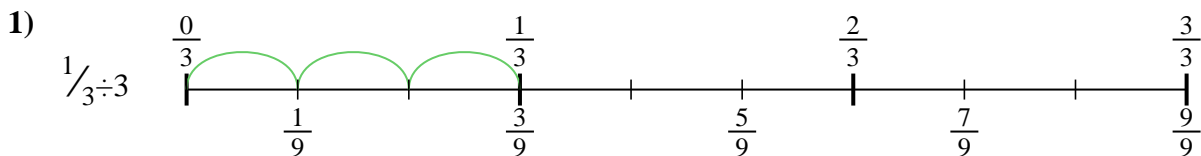
9. \_\_\_\_\_



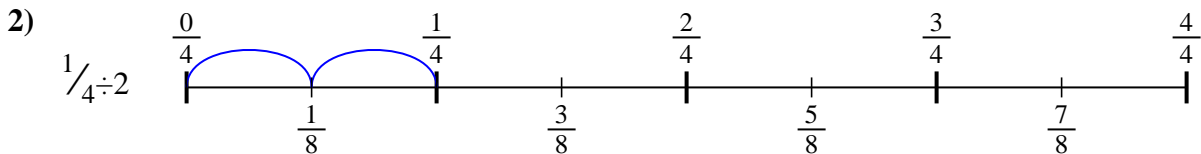


Use the numberline to solve each problem. The first is marked for you.

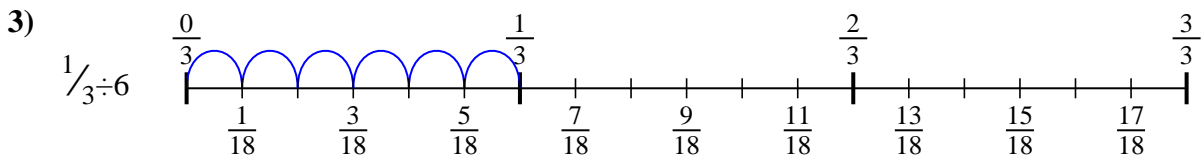
**Answers**



1.  $\frac{1}{9}$



2.  $\frac{1}{8}$

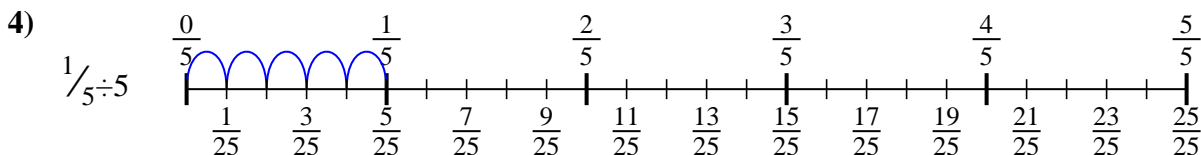


3.  $\frac{1}{18}$

4.  $\frac{1}{25}$

5.  $\frac{1}{15}$

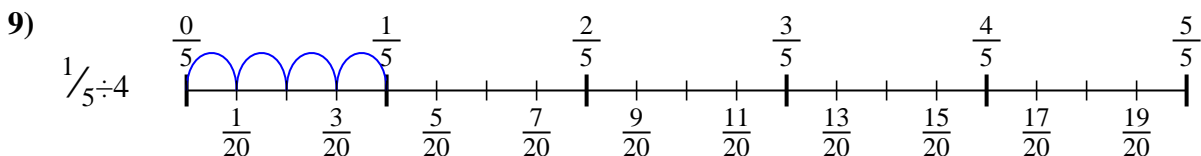
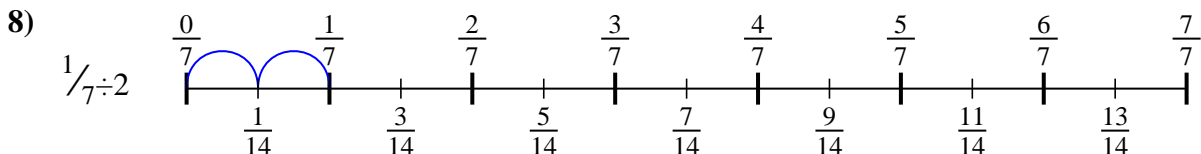
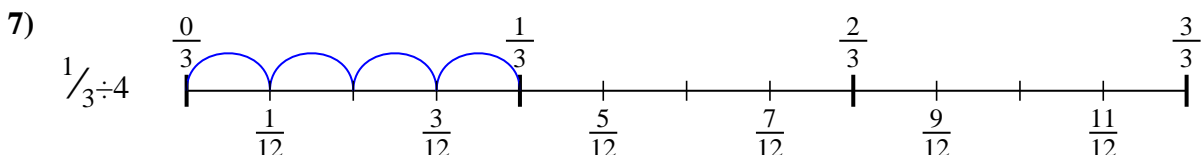
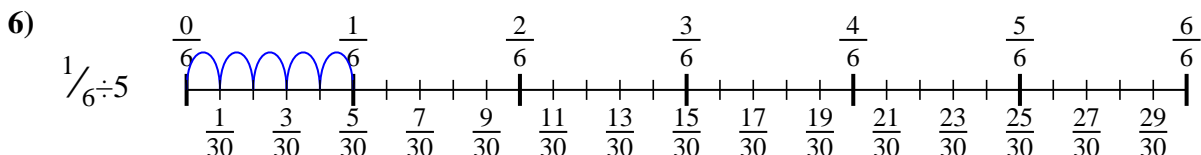
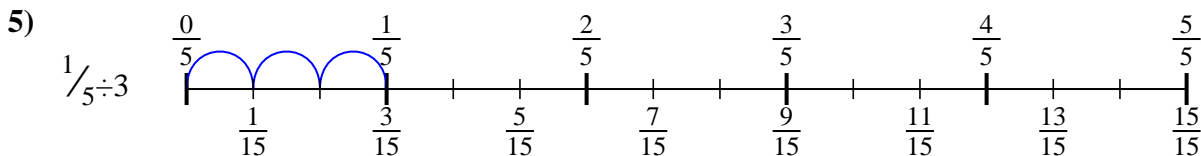
6.  $\frac{1}{30}$



7.  $\frac{1}{12}$

8.  $\frac{1}{14}$

9.  $\frac{1}{20}$





Use the numberline to solve each problem. The first is marked for you.

**Answers**

$1/15$

$1/25$

$1/9$

$1/12$

$1/14$

$1/8$

$1/30$

$1/18$

$1/20$

1. \_\_\_\_\_

2. \_\_\_\_\_

3. \_\_\_\_\_

4. \_\_\_\_\_

5. \_\_\_\_\_

6. \_\_\_\_\_

7. \_\_\_\_\_

8. \_\_\_\_\_

9. \_\_\_\_\_

1)

2)

3)

4)

5)

6)

7)

8)

9)